

Formula List

Area, A , of triangle, base b , height h . $A = \frac{1}{2}bh$

Area, A , of circle, radius r . $A = \pi r^2$

Circumference, C , of circle, radius r . $C = 2\pi r$

Curved surface area, A , of cylinder of radius r , height h . $A = 2\pi rh$

Curved surface area, A , of cone of radius r , sloping edge l . $A = \pi rl$

Curved surface area, A , of sphere of radius r . $A = 4\pi r^2$

Volume, V , of prism, cross-sectional area A , length l . $V = Al$

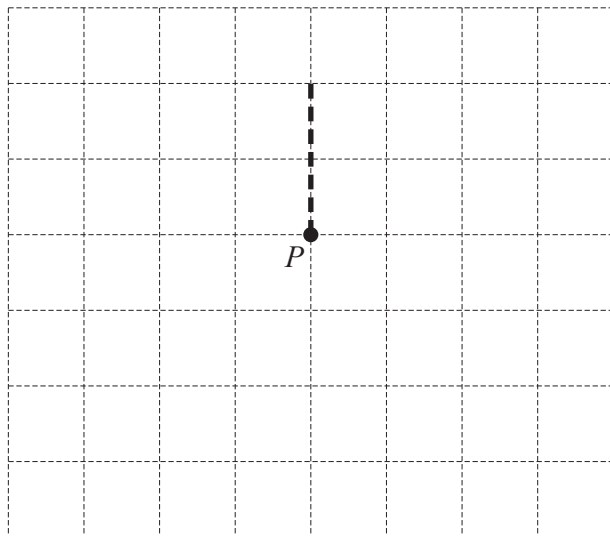
Volume, V , of pyramid, base area A , height h . $V = \frac{1}{3}Ah$

Volume, V , of cylinder of radius r , height h . $V = \pi r^2 h$

Volume, V , of cone of radius r , height h . $V = \frac{1}{3}\pi r^2 h$

Volume, V , of sphere of radius r . $V = \frac{4}{3}\pi r^3$

5 The diagram represents the route of a walker.



North



A walker starts at point P on the diagram and walks:

- 2 squares north, as shown by the dotted line then
- 3 squares west and then
- 4 squares south.

Complete the route of the walker on the grid.

[2]

6 These are the distances, in km, cycled by eleven cyclists in one week.

13 27 19 12 15 32 36 24 10 18 21

(a) Find the median.

..... km [2]

(b) Find the range.

..... km [1]

7 Work out.

$$1.2 \times 0.3$$

..... [1]

8 Work out.

$$6 - 14 \div 2$$

..... [1]

9 A map has a scale of 2 cm represents 5 km.

Write this scale as a ratio in its simplest form.

..... : [2]

10 Simplify.

$$4f - 3g - f - 2g$$

..... [2]

11 Here is a ferry timetable.

Port A	05 00	10 05	15 35	20 00
Port B	06 55			21 55
Port C			18 20	23 10
Port D		13 10		
Port E	08 35	14 00	19 00	23 50

Work out the shortest time taken for the journey from port A to port E.

..... h min [2]

12 Work out 15 as a percentage of 60.

..... % [1]

13 Expand.

$$x^2(3-x)$$

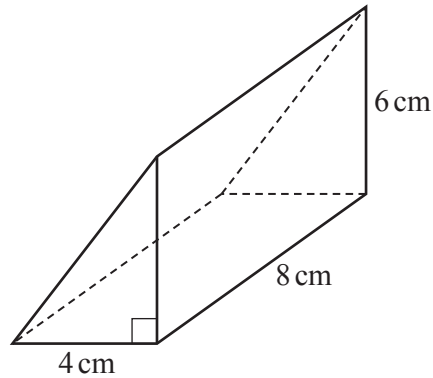
..... [2]

14 Factorise.

$$15q + 35$$

..... [1]

15



NOT TO
SCALE

Work out the volume of the triangular prism.

..... cm^3 [3]

16 The table shows the number of minutes taken by 28 students to solve a problem.

Number of minutes (m)	$0 < m \leq 1$	$1 < m \leq 2$	$2 < m \leq 3$	$3 < m \leq 4$	$4 < m \leq 5$	$5 < m \leq 6$
Number of students	1	5	6	10	4	2

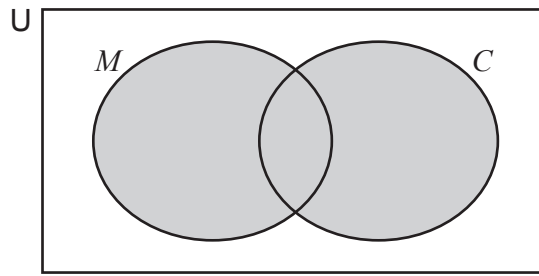
One of these students is chosen at random.

Find the probability that this student took 3 minutes or less to solve the problem.

Give your answer as a fraction in its simplest form.

..... [2]

17 Use set notation to describe the shaded region.



..... [1]

18 Rearrange the formula to make x the subject.

$$y = \frac{x}{4} + 5$$

$x =$ [2]

19 $U = \{15, 16, 17, 18, 19, 20\}$
 $P = \{\text{prime numbers}\}$

Write down the elements of P' .

..... [1]

20 Find an expression for the n th term of this sequence.

45 40 35 30 25

..... [2]

Questions 21, 22 and 23 are printed on the next page.

21 Jenna cycles at an average speed of 15 km/h.

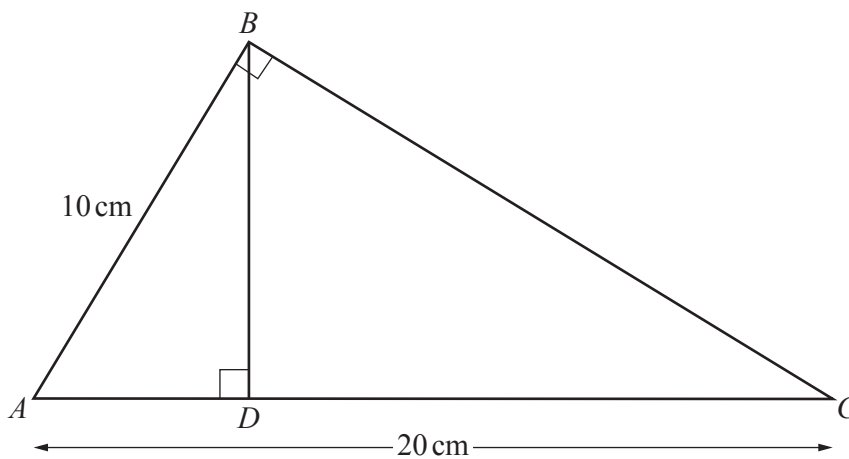
Find how many minutes she will take to cycle 10 km.

..... minutes [2]

22 Find the equation of the line parallel to $y = 5x + 1$ that passes through $(0, -2)$.

..... [2]

23



NOT TO
SCALE

Triangle ABC is mathematically similar to triangle ADB .
 $AC = 20$ cm and $AB = 10$ cm.

Work out AD .

$AD =$ cm [2]

Permission to reproduce items where third-party owned material protected by copyright is included has been sought and cleared where possible. Every reasonable effort has been made by the publisher (UCLES) to trace copyright holders, but if any items requiring clearance have unwittingly been included, the publisher will be pleased to make amends at the earliest possible opportunity.

To avoid the issue of disclosure of answer-related information to candidates, all copyright acknowledgements are reproduced online in the Cambridge Assessment International Education Copyright Acknowledgements Booklet. This is produced for each series of examinations and is freely available to download at www.cambridgeinternational.org after the live examination series.

Cambridge Assessment International Education is part of Cambridge Assessment. Cambridge Assessment is the brand name of the University of Cambridge Local Examinations Syndicate (UCLES), which is a department of the University of Cambridge.